

HOLIDAY'S HOMEWORK

Student : _____

Class : _____

Roll No : _____

General Instructions :

- **Revise the complete syllabus covered so far for Periodic Test 1.**
- **Complete all the pending classwork and homework, if any.**
- **Do your homework in neat and proper handwriting.**
- **Do all your homework as per the instructions.**
- **Parents are kindly requested to only guide their children while they complete their homework, and not do it for them.**
- **Originality of the work will be appreciated.**

"Homework is not a burden—it's a bridge that connects classroom learning with real understanding. It's how we ensure today's lesson becomes tomorrow's knowledge."

Wishing you all a joyful and refreshing Summer Holidays!"

Suggested Bucket List for You:-

1. Organize a Book Club: Start a book club with friends and read books you've always wanted to read but never had time to do so



2. Learn a New Skill: Learn a new skill, such as cooking, coding, photography, or a new language.



3. Ditch your Gadgets: Set limits on screen time not just for yourself but for the entire family.



Establish a household rule that says gadgets need to be shut off at certain times.



4. Eat Dinner Together: Eat at least one meal with your family.





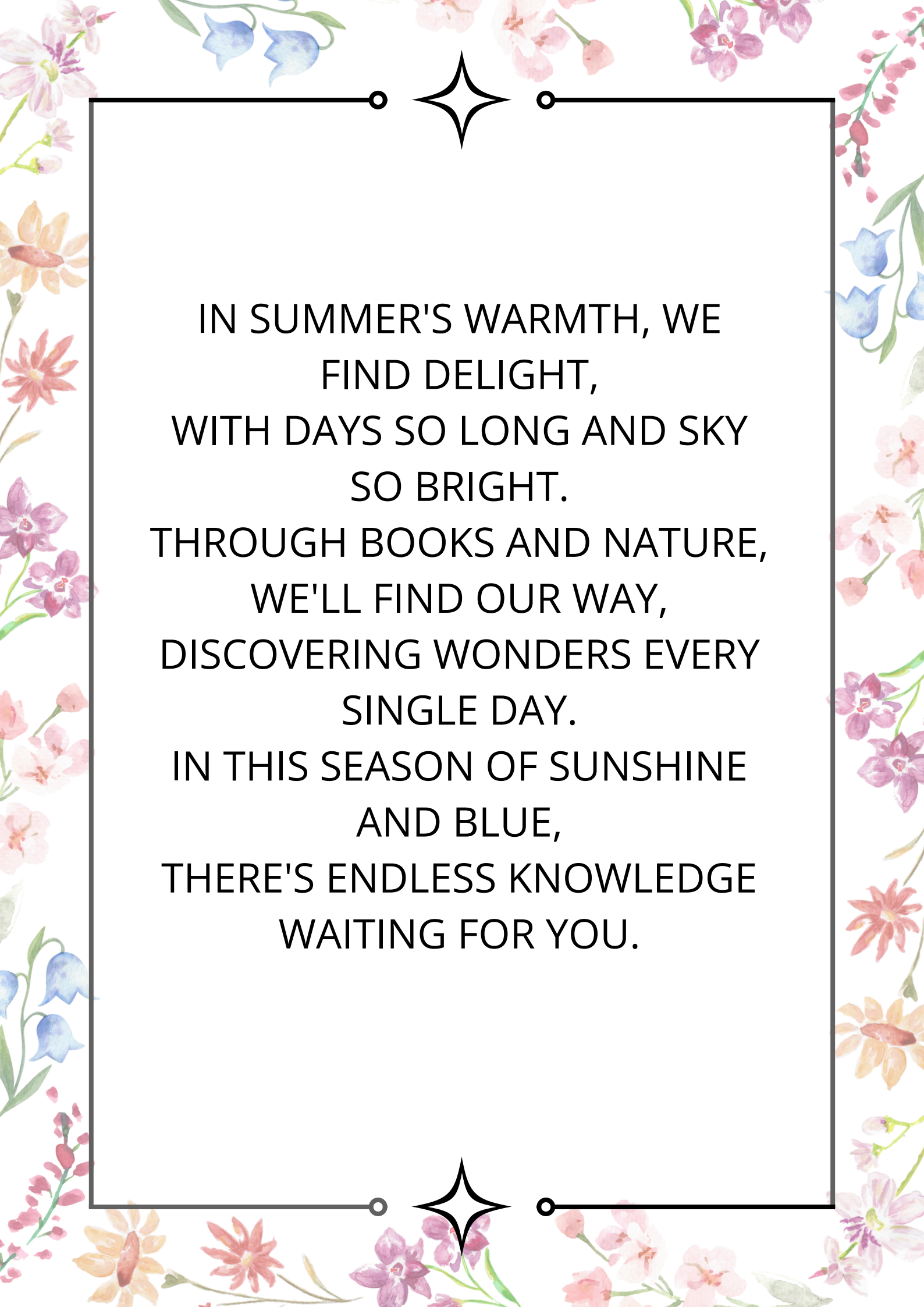
Dear Parents

The much awaited Summer Vacation has begun and we are excited to present meticulously curated Holiday Homework for the academic year 2025-26.

This year's assignment is packed with a diverse range of tasks and projects to ignite the imagination of our students. From exploring nature to creating work of art, there's something for everyone. At [DAV Public School, Professor Colony](#), as we prioritize academic growth, we equally value the significance of relaxation and rejuvenation. We urge our students to seize this opportunity to unwind, cherish quality moments with family, and engage in activities that ignite joy. Our aim is not only stimulate our students intellectually but also encourage them to discover new interests and talents.

In an endeavor to foster holistic development of students, each subject related task is based on different levels of Bloom's Taxonomy and caters to various skills, competencies and interests. Let us together guide our students to discover and utilize their individual strengths and talents. We are grateful for your unwavering support in all our endeavors.

Warm Regards



IN SUMMER'S WARMTH, WE
FIND DELIGHT,
WITH DAYS SO LONG AND SKY
SO BRIGHT.
THROUGH BOOKS AND NATURE,
WE'LL FIND OUR WAY,
DISCOVERING WONDERS EVERY
SINGLE DAY.
IN THIS SEASON OF SUNSHINE
AND BLUE,
THERE'S ENDLESS KNOWLEDGE
WAITING FOR YOU.

Class VIII
Sub English
Holidays Homework

General Instructions–

- 1.Students to do the Holiday homework themselves under the guidance of parents.**
- 2.Only one model/project will be allotted roll no wise in one subject which they can select from options given .**
- 3.Holiday homework to be done on the assignment sheets.**

•**Make a comic script** from the chapter “The Fun They Had” and differentiate old schools and futuristic schools.

•**Project work**– Prepare a project on the writers/poets of Haryana and Telangana with their pictures and their contribution (Mention at least 5 writers/poets)

Files compulsory for all

CRAB WORKSHEETS

CHALLENGING -

Give an account of the King’s experience at the Hermit’s cell?

How did the Hermit elaborate his own statement ‘You have already been answered’?

RECAP-

When he had dug two beds, the king stopped and repeated his questions. The Hermit again gave no answer, but rose, stretched out his hand for the spade, and said :

‘Now rest awhile- and let me work a bit.’

Why did the king repeat his questions?

Though he was not tired, why did the king stop digging after preparing two beds?

Why did the Hermit ignore the King’s questions purposely?

What light does the incident reflect on the hermit’s character?

ADVANCED -

HOTS

Why did the king wish to know the answers to the three questions?

Why were the answers given by the learned men different?

How did the king get the answers to his three questions?

What values of the hermit made him wise?

What is the moral of the story?

BASIC -

LOTS

What did the king announce in his kingdom?

Where did the hermit live?

Why did the king help the hermit?

Why did the bearded men want to kill the king ?

Why did the king forgive the bearded man?

GRANNY'S TREE CLIMBING

Q1.Read the extracts given below and answer the questions that follow:

“Poor Granny! For her, it was like a brief season in hell, Confined to her bedroom, while every breeze Whispered of summer and dancing leaves.”

- a) Name the poem and the poet.
- b) Name the poetic device used in line 1.
- c) Write the word that has been personified.
- d) Why has Granny been called ‘Poor Granny’?

Q2. Complete the following:

- (a) The doctor recommended a week’s bed rest to Granny because_____
- (b) When the narrator and his family were in town, Granny_____
- (c) The narrator and his family sighed in relief because_____
- (d) Granny learnt climbing trees from_____.
- (e) Granny was happier_____
- (f) The narrator carried _____ everyday to his Grandmother on the tree top house.
- (g) Granny considered staying in bed as _____.
- (h) _____ made a tree top house for her.
- (i) Granny wanted to grow old _____ manner.
- (j) She was _____ when she last climbed a tree

Q.3. Answer the following questions in about 30 words.

- a) The doctor prescribed Granny complete bed rest. Did she follow the doctor’s advice? Why?
- b) What message does the poem – ‘Granny’s Tree Climbing’ give?
- c) What do you think is the theme of this story
- d) What was the grandmother’s gift since childhood?

Q4. Read the following statements and state whether true or false.

- 1. Granny was 72, when she last climbed a tree.
- 2. Grandma and Grandson had milk while sitting on the tree top house.
- 3. Granny fell down from the tree in the absence of her family members.
- 4. Grandma’s son was very obedient indeed.
- 5. Granny was asked to rest for two weeks.
- 6. Granny had been climbing trees since childhood.
- 7. Granny could only climb trees that were high.
- 8. The narrator shared a lovely bond with his Granny.
- 9. The narrator made the tree top house for his Granny all alone.

NOTICE WRITING

Q. You are Manoj / Meghna, the Head Boy / Head Girl of St. Peter’s School, Ranchi. Draft a notice for the House Captains and Vice-Captains to attend a meeting with Principal regarding

the plantation of saplings in the school premises as a part of School Gardening Project to make the environment healthy and green. [Word limit : 50 words]

Q. You are Raghav/Riti, Head Boy/Head Girl of Glory Public School, Faridabad. Your school is organising a free vaccination drive for the students of age group of 12 and above. Breakfast is advisable before vaccination. Draft a notice in about 50 words with all necessary details.

Q. As a part of the social responsibility programme, your school is raising funds for Kerala flood victims. As the Head Boy/ Head Girl of your school, write a notice in about 50 words for the school notice board to appeal to all the students to make donations for the needy.

Q. There is an inter-house drawing competition in St. Mark School, Bhiwani which is to be sponsored by the Hero Group of Industries. The first three candidates will be given away the prizes of Rs 5000,3000 and 2000 respectively. As the secretary of the art club of the school, write a notice in not more than 50 words.

Q. Your school is conducting an Inter class Basketball Competition. Draft a notice in about 50 words informing the same.

GRAMMAR

TENSES

Q. Complete the following letter with a suitable form of the verb given in brackets.

Dear Sham

Well, I _____ (arrive) back safely two weeks ago. The flight (a)_____be fine, but a bit long I (b) _____ (watch) two films and (c) _____(eat) two breakfasts! Thank you for everything. I (d)_____ (have) a really good time with you in Mumbai. I hope you (e) _____(enjoy) it too. Everything here is very different from Mumbai. I (f)_____ (write) this letter outside in the garden. I(g)_____ (sit) under a big umbrella because the sun is very hot today. I know we (h)_____ (have) some sunny days in Mumbai but I remember there (i) _____(be) also some rain! It was difficult for me to start work after my wonderful holiday, but it's OK now. I (j)_____ (be) in a new department since I (k)_____ (come) home and it's interesting. I (l)_____ (have) a new manager now and that's good because the old one (m) _____ (be) horrible. (n)_____(you/like) rock music? My brother (o)_____ (be) a drummer in a new group. He (p)_____ (practice) in his bedroom at the moment and it's quite loud! I (q)_____ (just/sent) u some of his cassettes. I hope you like them. By the way, (r)_____(you/find) a black leather photo album? I think I (s) _____ (leave) it in the bedroom. Could you send it to me sometime? No hurry. Jack (t)_____ (sit) in the garden with me and he sends his love to you. Please write soon, and thank you again for a wonderful time.

Love, Harry.

NARRATION

Q1. Read the given dialogue and fill in the blanks.

Dinesh : I have a terrible ache in my lower back.

Surya : How long has your back been bothering you?

Dinesh I've been having pain for about the last two weeks.

Surya : Do you have any history of back problems?

Dinesh:No, this is the first time.

Dinesh said that he had a terrible ache in his lower back. Surya asked him(a)

_____ bothering him to which Dinesh replied that he

(b)_____

pain for about the previous two weeks. Surya asked him c) _____ of back problems

to which he replied in the negative and said (d) _____ first time.

Q2. Read the given dialogue and fill in the blanks.

Hira : Would you like to have some ice cream ?

Akash: I'm on a diet to lose weight.

Hira: It doesn't really hurt to have just a bite.

Akash: Please don't tempt me.

Hira: You are really strong-willed.

Hira asked Akash (a) _____ some ice cream to which Akash said that he was on a diet to lose weight. Hira said (b) _____ just a bite. Akash (c) _____ tempt him.

Hira said (d) _____ strong-willed.

Q3. Read the given dialogue and fill in the blanks with appropriate words.

Ranjana: Have you been doing any workouts?

Manoj I've been going to the gym for half-a-year now.

Ranjana: Have you been lifting weights?

Manoj Yes. Besides that I do an hour of aerobics every other day.

Ranjana: Well, you look like a million bucks!

Ranjana asked Manoj (a) _____

Manoj replied (b) _____ him if he had been lifting weights. Manoj replied (c) _____ every alternate day. Ranjana complimented him by (d) _____ bucks.

Ranjana asked an hour of aerobics like a million bucks.

Q4. Read the given dialogue and fill in the blanks by appropriate words.

John It's like an oven here. You must be roasting.

Mira: I'm just comfortable.

John: It has to be over 95 degrees in here.

Mira: I'm a cold-blooded person.

John Well, can we at least open a window and have some ventilation?

John said to Mira (a) _____ there and added that she must be roasting. Mira replied that she was just comfortable to which John (b) _____ over 95 degrees in there. Mira replied that (c) _____ person. John asked if they (d) _____ and have some ventilation.

Q5. Read the conversation given below and complete the paragraph that follows.

Karan Are you going to attend Vikram's birthday party?

Rohit I am not sure if my mother will permit me to go.

Karan: You can tell your mother that all of us are going to the party.

Rohit She knows that all my friends are going, but she also wants me to do well in tomorrow's exam.

Karan asked Rohit (a) _____

Vikram's birthday party. Rohit replied that (b) _____ if his mother would permit him to go. Karan advised Rohit c) _____ that all of them were going to the party. Rohit

told Karan that his mother was aware that all his friends were going but she

(d) _____ in the next day's exam.

MODALS

1. The following passage has not been edited. There is one error in each of the lines.

Write the incorrect word and the correction.

Incorrect. Correct

I was sorry to hear your problem but

Eg. Was. Am

you should worry. I am sure

(a) _____

I will help you. First, regarding

(b) _____

money, I should lend you as much

c) _____

as you need. You will buy some

(d) _____

good books from the local market

that ought to improve your level

(e) _____

of understanding. You can have

(f) _____

no difficulty in doing your work.

Try if you will manage some

(g) _____

time for outing. You might mix

(h) _____

with the older students and make friends with them.

2. In the following paragraph, one word has been omitted in each line. Write the missing word along with the word that comes before and the word that comes after it in your answer sheets against the correct blank number. Ensure that the word that forms your answer is underlined.

Before. Word. After

Today like to tell you I would like

about my school Principal. He to go

a) _____

for regular morning walk. He get

b) _____

up early. No one stop him from

c) _____

going out even when he was ill.

He always say that morning walk

d) _____

cures his illness. He never fell ill. Even at the age of seventy he run for

e) _____

miles and leave youngsters far behind

f) _____

He have learnt this from

g) _____

his teachers. He live long.

h) _____

Class-8

Sub- Hindi

Summer Vacation Holidays Homework (session 2025-26)

HINDI

Instructions: Use waste material to make models or hangings.

👉 Taking a break from studies once in a while is very important. It freshens up our body and mind. What is your favourite Grammar or literature topics in study time. Like अलंकार, उपसर्ग- प्रत्यय, हम पंछी उन्मुक्त गगन के, आश्रम के अतिथि और संस्मरण, Prepare only one model or hangings of that topics.

👉 Prepare a Dictionary having minimum five words of each alphabet (new words) with meaning to enhance the vocabulary. Cover it with beautiful cover and put a book mark in it with a moral value written on bookmark.

👉 Do revise all the Work done in class

Do reading practice of Hindi language daily.

Write one page of writing daily in note book.

Complete and cover your notebook.

First week

Assignment 1

1. संवाद लेखन

- हेलेन केलर तथा कल्पना चावला के संघर्ष में जीवन पर दो मित्रों के मध्य हुए वार्तालाप को संवाद के रूप में लिखिए।

2. निम्नलिखित गद्यांश को ध्यानपूर्वक पढ़िए और उस पर आधारित प्रश्नों के उत्तर दीजिए-

सफल वही होता है, जो समय के साथ चलता है। जो लोग प्रत्येक कार्य की योजना पहले ही बना लेते हैं, वे अपने परिश्रम से सफलता की सीढ़ी पर चढ़ जाते हैं। किसी भी काम को हमें कल पर नहीं छोड़ना चाहिए बल्कि समय के साथ चलना चाहिए क्योंकि जो व्यक्ति अपने काम को कल पर छोड़ता है वह असफलता व विक परिस्थितियों को आमंत्रित करता है। उचित समय बीत जाने पर किया गया कार्य निष्फल होता है उचित समय की प्रतीक्षा करनी पड़ती है। उसकी अगवानी करके उसका आश लिया जा सकता है क्योंकि समय को अपनी उपेक्षा

सहन नहीं होती। यदि सारी रेलगाधि समय पर छूट और समय से पहुँचें: सारे लोग ठीक समय पर कार्य प्रारंभ करें ठीक समय पर समाप्त करें, तो सभी मनुष्यों का समय बच जाता है। ऐसा होने मनुष्य एक दिन में पहले से दोगुना काम कर सकता है। समय में बहुत ताकत हैं। जो समय का हाथ पकड़कर चलता है, समय उसे आसमान की बुलंदियों पर जाता है और जो समय के साथ नहीं चलता, समय उसे नीचे की ओर ले आता।

1)विकट परिस्थितियों से लेखक का तात्पर्य है-

क)भयंकर स्थिति

ख)अच्छी स्थिति

ग)प्रेरक स्थिति

घ)संतोषजनक स्थिति

(ii)निम्नलिखित कथन (A) तथा कारण ® को ध्यानपूर्वक पढ़कर नीचे दिए विकल्पों में से कोई एक सही विकल्प चुनकर लिखिए-

कथन (A): समय बहुत शक्तिशाली होता है।

कारण ® : समय के साथ चलने वाला व्यक्ति ऊँचाइयों को छूता है।

कथन (A) गलत है लेकिन कारण ® सही है।

कथन (A) तथा कारण ® दोनों गलत हैं।

कथन (A) सही है लेकिन कारण ® उसकी गलत व्याख्या करता है।

कथन (A) तथा कारण ® दोनों सही हैं तथा कारण ® कथन (A) की सही व्याख्या करता है।

(iii)समय का आशीर्वाद कैसे लिया जा सकता है?

क)समय की उपेक्षा करके

ख)समय का सदुपयोग करके

ग)समय बीत जाने पर कार्य करके

घ)कार्य करने में विलंब करके

(iv)प्रस्तुत गद्यांश हमें क्या संदेश देता है?

(v)कार्य की योजना बनाने से मनुष्य को क्या लाभ होता है?

Second week

Assignment 2

1.निम्नलिखित पद्यांश को पढ़कर नीचे दिए गए प्रश्नों के उत्तर लिखिए-

होती सीमाहीन क्षितिज से

इन पंखों की होड़ा-होड़ी,

या तो क्षितिज मिलन बन जाता

या तनती साँसों की डोरी।

नीड़ न दो, चाहे टहनी का

आश्रय छिन्न-भिन्न कर डालो,

लेकिन पंख दिए हैं,

तो आकुल उड़ान में विघ्न न डालो।

क) पक्षी क्षितिज से मिलन की इच्छा क्यों व्यक्त कर रहा है?

ख) पक्षी द्वारा 'आश्रय छिन्न-भिन्न कर डालो' कहने का क्या कारण है?

ग) उड़ान को आकुल क्यों कहा गया है?

2. रचनात्मक लेखन

(i) स्वास्थ्य की रक्षा

- उत्तम स्वास्थ्य की आवश्यकता
- पौष्टिक आहार
- पहला सुख निरोगी काया

3.(i) 'बूद' शब्द में उचित स्थान पर अनुस्वार/अनुनासिक चिह्न का प्रयोग कीजिए।

(ii) 'रोज' शब्द में उचित स्थान पर नुक्ता लगाइए।

(iii) 'पसाद' शब्द में 'र' के उचित रूप का प्रयोग कीजिए।

4.(i) 'वि' उपसर्ग में मूल शब्द जोड़कर नया शब्द बनाइए।

(ii) 'स्वभाव' शब्द में उचित प्रत्यय का प्रयोग करते हुए नया शब्द बनाइए।

5. 'अश्रु' शब्द का तद्भव रूप लिखिए।

'आग' शब्द के दो पर्यायवाची शब्द लिखिए।

6.(i) 'स्तुति' शब्द का विलोम शब्द लिखिए।

(ii) निम्नलिखित वाक्यांश के लिए एक शब्द लिखिए-पत्तों की बनी कुटिया

Third week

Assignment 3

1● पत्र लेखन

आपके मोहल्ले के कूड़ेदान में गंदगी का ढेर लगा है इस संबंध में अपने नगर निगम अधिकारी को शिकायती पत्र लिखा था जिस पर शीघ्र ही उचित कार्यवाही हो गई है अतः नगर निगम अधिकारी को लगभग 80 -100 शब्दों

मैं धन्यवाद पत्र लिखिए। 2.निम्नलिखित गद्यांश को ध्यानपूर्वक पढ़िए और उस पर आधारित प्रश्नों के उत्तर दीजिए-

प्रायः ऐसा होता है कोई भी वक्तव्य सुनने के बाद जब सुनने वालों से पूछे कि क्या बोला गया है, तो सौ लोगों के सौ जवाब मिलते हैं, जितने सुनने वाले, उतने ही अर्थ। इसलिए आपस में बड़े विवाद भी होते हैं। बुद्ध से एक बार उनके शिष्य ने पूछा, 'क्या हम वही सुन पाते हैं, जो आप बोलते हैं?' जब मैं दूसरों से बात करता हूँ, तो पता चलता है कि उन्होंने कुछ और सुना, जबकि मैंने कुछ और। बुद्ध ने कहा, "यह स्वाभाविक है। बोली तो एक ही बात जाती है, लेकिन सुनी उतनी जाती है जितने सुनने वाले होते हैं. क्योंकि तुम मन से सुनते हो, आत्मा से नहीं। कल रात मैंने अंतिम प्रवचन के बाद कहा कि- उठो; रात्रि का अंतिम कार्य करो। कल समागम में चोर और एक गृहस्थ भी आए थे। जब मैंने कहा कि अब रात्रि के

अंतिम कार्य में संलग्न हो जाओ, तब तुम्हें ख्याल आया ध्यान का, चोर ने सोचा कि काफी रात हो गई, चाँद ऊपर चढ़ आया है, अब चोर-कर्म का वक्त हुआ। गृहस्थ ने सोचा, बहुत देर हो गई, पता नहीं, घर जाने के लिए कोई वाहन अब मिलेगा भी या नहीं? मैंने एक बात कही थी। गृहस्थ ने अपना अर्थ लिया और चोर ने अपना। फिर भिक्षुकों ने भी इसके अलग-अलग अर्थ ही लिए होंगे।“ सुनना बहुत कठिन है क्योंकि सुनने की कला वास्तव में कभी सिखाई नहीं जाती। बोलने की कला के तो बड़े प्रशिक्षण दिए जाते हैं। मगर यदि सुनने वाले सही न हों, तो अर्थ का अनर्थ हो जाता है। सुनने के लिए आपका मन शांत और स्वीकार भाव में होना चाहिए।

(i)कहे गए वक्तव्य का अलग-अलग लोगों द्वारा अलग-अलग जवाब क्यों मिलता है?

क)अपनी मनःस्थिति के अनुरूप अर्थ लगाने के कारण

ख)अपनी श्रवण के अनुरूप अर्थ लगाने के कारण

ग)कही गयी बातों को ध्यान से न सुन पाने के कारण

घ)कही गई बात का महत्व न जानने कारण

(ii)शिष्य द्वारा बुद्ध से पूछा गया-

संसार में लोगों के मन में व्याप्त आर्थिक भिन्नता और दुःखों का कारण

क)लोगों के बीच आपसी कहासुनी और विवाद का कारण

ख)दो व्यक्तियों के बीच मन-मुटाव और भिन्नता का कारण

ग)कही गई एक ही बात के भिन्न अर्थ ग्रहण करने का कारण

(iii)निम्नलिखित कथन (A) तथा कारण ® को ध्यानपूर्वक पढ़िए तथा दिए गए विकल्पों में से कोई एक सही विकल्प चुनकर लिखिए।

कथन (A) - लोगों के मध्य बड़े विवाद होते हैं।

कारण ®- स्वयं को दूसरों से श्रेष्ठ समझना।

कथन (A) गलत है लेकिन कारण ® सही है।

कथन (A) तथा कारण ® दोनों गलत हैं।

कथन (A) सही है लेकिन कारण ® उसकी गलत व्याख्या करता है।

(घ)कथन (A) तथा कारण ® दोनों सही हैं तथा कारण ® कथन (A) की सही व्याख्या करता है।

(iv)बुद्ध की कही बात का गृहस्थ ने क्या अर्थ निकाला?

(v)इस गद्यांश में किस कला के महत्व को उजागर किया गया है तथा उसे किस प्रकार विकसित किया जा सकता है?

प्रश्न 3. निर्देशानुसार उत्तर लिखिए-

क)निम्नलिखित शब्दों में अनुस्वार अथवा अनुनासिक का चिह्न उचित स्थान पर लगाइए-

सस्मरण

ऊची

ख) निम्नलिखित शब्दों में 'रके' उचित रूप का प्रयोग कीजिए-

धर्म

राष्ट्र

ग) 'अति' उपसर्ग में मूल शब्द जोड़कर नया शब्द बनाइए

घ) 'प्रभु' शब्द में उचित प्रत्यय का प्रयोग करते हुए नया शब्द बनाइए

प्रश्न 4. निर्देशानुसार उत्तर लिखिए-

क) 'उपहार' शब्द के दो पर्यायवाची शब्द लिखिए।

ख) रिक्त स्थान की पूर्ति के लिए उचित विलोम शब्द लिखिए -

अपने----- से मिलकर आ रहा हूँ। (अग्रज)

ग) निम्नलिखित वाक्यांश के लिए एक शब्द लिखिए जो आकाश में विचरने वाला है

Fourth week

Assignment 4

प्रश्न 1. निम्नलिखित गद्यांश को ध्यानपूर्वक पढ़िए और उस पर आधारित प्रश्नों में सर्वाधिक उपयुक्त विकल्प छांटकर लिखिए।

पर्यटन या देशाटन एक ही है इनका शब्दिक अर्थ है देश-विदेश में भ्रमण करना। मनुष्य में जिज्ञासा वृत्ति होती है जो उसे अपने देश के विषय में ही नहीं, विदेश के बारे में भी जानने की प्रेरणा देती है यह नई तुको जानना चाहता है उनके सौंदर्य को निहारना है। वह विश्व के बारे में बहुत पढ़ता है उन्हें अपनी आँखों से देखना चाहता है। उनके रहस्यों को उद्घाटित करना चाहता है ऊँची-ऊँची पर्वत श्रृंखलाएँ समुद्र की गहराई उसको अपनी और आकृष्ट करती है पर्यटन अथवा देशाटन का सर्वाधिक महत्व ज्ञानार्जन है विभिन्न प्रकार के व्यक्तियों से मिलकर, प्रदेशों के सौंदर्य को देखकर भिन्न-भिन्न तरह

की जानकारी प्राप्त होती है। पर्यटन द्वारा मोरंजन भी होता है। विभिन्न स्थानों पर्वतों, नदी-तालाबों तथा समुद्र की जाती लहरों को देखकर पर्यटक आनंदित हो जाते हैं परिवर्तित स्थान तथा वहीं की जलवायु का प्रभात स्फूर्ति तो देता ही है. साथ ही नया उत्साह भी भर देता है। उस सबकी स्मृति बहुत समय तक हमारे साथ रहती है। भारत सदैव ऐसा राष्ट्र रहा है। जिसने विश्वविख्यात पर्यटकों को अपनी और आकृष्ट किया है। मैगस्थनीज, फाइमान हवेनसांग आदि विदेशी पर्यटक भारत भ्रमण के लिए आए तथा यहाँ की सभ्यता रिवाज, संस्कृति आदि का ज्ञान प्राप्त कर आश्चर्यचकित हुए तभी भारतीय संस्कृति दूर-दराज के प्रदेशों में फैलती गई।

i) मनुष्य की कौन-सी वृत्ति पर्यटन के लिए प्रतिक है?

क)निस्वार्थ प्रेम

(ख)जिज्ञासा

(ग)साहस

(घ) दृढ़ निश्चय

(ii) पर्यटन किस कार्य में विशेष रूप से सहायक होता है?

क) ज्ञान प्राप्त करने के लिए

ख) धन प्राप्त करने के लिए

ग) स्वाध्याय के लिए

घ) केवल विज्ञान के लिए

(iii) पर्यटक क्या देखकर मुख्य आनंदित होते हैं?

क) नाना व्यंजन

ख) खेल-खिलौने

ग) दुर्गम रास्ते

घ) प्राकृतिक सौंदर्य

(iv) पर्यटन के पश्चात मनुष्य कैसा अनुभव करता है?

(क) नवीन उत्साह और स्फूर्ति

(ख) रोमांच व चौड़ा

(ग) साहस व जोश

(v) प्रयास का उचित शीर्षक है

क) पर्यटन का विकास

ख) भारतीय संस्कृति का दर्शन

(ग) पर्यटन का महत्व

(घ) घुमक्कड़

प्रश्न 2 (i) हसना शब्द में उचित स्थान पर अनुस्वारा
अनुनासिक विन का प्रयोग कीजिए

(ii) निकाका शब्द में उचित स्थान पर नुक्ता लगाइए।

(iii) दुगुम शब्द में के उचित रूप का प्रयोग कीजिए

प्रश्न 3. (i) सद् उपसर्ग में मूल शब्द जोड़कर नया शब्द
बनाइए।

(ii) इक प्रत्यय का प्रयोग करते हुए एक नया शब्द बताइए

प्रश्न 4 (i) कवि शब्द का तद्भव रूप लिजिए

प्रश्न 5 (i) 'नम' शब्द के दो शब्द लिखिए।

क)अनुज'शब्द का विलोम शब्द लिखिए।

प्रश्न 6निम्नलिखित वाक्यांश के लिए एक शब्द लिखिए।

क)दूर की सोचने वाला

प्रश्न 7 पत्र लेखन

- आपके मोहल्ले में बच्चों के खेलने के लिए किसी प्रकार की व्यवस्था नहीं है। नगर निगम के अध्यक्ष को पत्र लिखकर बाल उद्यान बनवाने की प्रार्थना कीजिए।

HOLIDAY'S HOMEWORK

CLASS VIII

MATHS

1. REVISE CHAPTER 1 -5 DONE IN THE CLASS
2. SOLVE BRAIN TEASERS OF CHAPTER 1-5 OF YOUR BOOK
3. SOLVE THE ASSERTION REASON AND CASE STUDY OF CHAPTER 1-4 AS GIVEN BELOW
CHAPTER 1 SQUARES AND SQUARE ROOTS

ASSERTION - REASON BASED QUESTIONS

The following questions consist of two statements – Assertion (A) and Reason (R). Answer these questions selecting the appropriate option given below :

- (a) Both A and R are true and R is the correct explanation for A.
 - (b) Both A and R are true but R is not the correct explanation for A.
 - (c) A is true but R is false.
 - (d) A is false but R is true.
1. **Assertion :** A perfect square number between 30 and 40 is 36.
Reason : A perfect square is a number that can be expressed as the product of the number by itself.
 2. **Assertion :** Total number of non-perfect square numbers between 20^2 and 21^2 is 40.
Reason : There are $2n$ non-perfect square numbers between the squares of the two consecutive numbers n and $(n + 1)$.
 3. **Assertion :** The 11th triangular number is 66.
Reason : n th triangular number is given by $\frac{n(n-1)}{2}$.
 4. **Assertion :** $441^2 - 440^2$ is equal to 880.
Reason : The difference of $(n + 1)^2$ and n^2 is $2n + 1$, where n is a natural number.
 5. **Assertion :** The square root of 3 is 1.732 (nearly).
Reason : If a square number has n number of digits, then its square root will have $\left(\frac{n+1}{2}\right)$ digits, when n is odd.
 6. **Assertion :** 17442 is not a perfect square number.
Reason : A number having 2 at its unit's place is never a square number.

CASE STUDY BASED QUESTIONS

1. Rajat got the chance to see the Republic Day Parade at Rajpath in Delhi, where he saw an Army contingent consisting of 616 members marching behind the Army Band of 30 members followed by 576 member's of CRPF Troops along with 114 members of 'Daredevils Motorcycle Team'.



Based on the given information, answer the following :

- Find the least number of members to be added to the total number of members so that they can be arranged in the form of a square.
 - Find the least number of members by which the Army contingent of 616 members should be multiplied to get a perfect square.
 - Find the square root of the number of members of CRPF Troops.
 - Write a triangular number just greater than the number of Army band members which is also a square number.
2. Read the following paragraph and answer the questions that follow.

Square of a number is the product of the number by itself. The numbers which are the squares of natural numbers, are called square numbers or perfect squares. All square numbers end with digit 0, 1, 4, 5, 6 or 9 at unit's place.

The square root of a number ' a ' is that number which when multiplied by itself gives the number ' a ' as the product.

- Find the square of 455.
- Write a Pythagorean triplet whose one member is 15.
- Find the least number which must be added to 4080 so as get a perfect square.

- (iv) If $\frac{\sqrt{x}}{\sqrt{441}} = 0.02$, then find the value of x .

CHAPTER 2 CUBES AND CUBE ROOTS

ASSERTION - REASON BASED QUESTIONS

The following questions consist of two statements – Assertion (A) and Reason (R). Answer these questions selecting the appropriate option given below :

- (a) Both A and R are true and R is the correct explanation for A.
(b) Both A and R are true but R is not the correct explanation for A.
(c) A is true but R is false.
(d) A is false but R is true.
1. **Assertion :** The smallest number by which the number 108 must be multiplied to obtain a perfect cube is 3.
Reason : The perfect cubes are the cubes of natural numbers.
2. **Assertion :** Sum of $1^3 + 2^3 + 3^3 + 4^3 + 5^3 + 6^3 + 7^3 + 8^3 + 9^3 + 10^3$ is 3025.
Reason : Sum of cubes of first n natural numbers is equal to the squares of their sum.
3. **Assertion :** The unit digit of cube root of 456533 is 7.
Reason : Cube of a number ending with digit 3, ends with digit 7.
4. **Assertion :** If the sum of 10 consecutive odd numbers is 1000, then the first odd number is 45.
Reason : Sum of n consecutive odd numbers = n^2 , where first odd number = $2 \times (n - 1)$ th triangular number + 1.
5. **Assertion :** If three numbers are in the ratio 2 : 3 : 4 and their product is 31944, then the smallest number is 22.
Reason : Cube roots of even natural numbers are even and cube roots of odd natural numbers are odd.

CASE STUDY BASED QUESTIONS

1. Seminars hold a great importance for students. They are platforms not only to learn new aspects, different perspectives and latest information, but also a good way of networking. A seminar is being conducted by an Educational Institute, where the participants are educators of different subjects. The number of participants in Hindi, English and Mathematics are 800, 1331 and 1250 respectively.



Based on the given information, answer the following questions :

- (i) The number of participants of which subject is a perfect cube is
(a) Hindi (b) English (c) Mathematics (d) None of these
- (ii) The cube root of product of participants in Hindi and Mathematics is
(a) 10 (b) 100 (c) 1000 (d) 10,000

(iii) By what least number should the number of participants in Hindi be multiplied so that it becomes a perfect cube?

(a) 2

(b) 5

(c) 10

(d) 50

(iv) By what least number should the number of participants in Mathematics be divided so that it becomes a perfect cube ?

(a) 2

(b) 5

(c) 10

(d) 50

CHAPTER 3 EXPONENTS AND RADICAL

ASSERTION - REASON BASED QUESTIONS

The following questions consist of two statements – Assertion (A) and Reason (R). Answer these questions selecting the appropriate option given below :

(a) Both A and R are true and R is the correct explanation for A.

(b) Both A and R are true but R is not the correct explanation for A.

(c) A is true but R is false.

(d) A is false but R is true.

1. **Assertion :** If $3^m + 3^{-3} = 3^5$, then m is equal to 2.

Reason : The power of a number implies how many times the number is to be multiplied by itself.

2. **Assertion :** If $\left[\left\{ \left(-\frac{1}{7} \right)^2 \right\}^{-3} \right]^x = 1$, then the value of x is 0.

Reason : If a is any non-zero number, then $a^0 = 1$.

3. **Assertion :** If $\left(\frac{-4}{9} \right)^{-4} + \left(\frac{9}{-4} \right)^{12} = \left(\frac{-4}{9} \right)^{-1} \times \left\{ \left(\frac{-4}{9} \right)^3 \right\}^x$, then the value of x is 3.

Reason : $\left(\frac{a}{b} \right)^m + \left(\frac{b}{a} \right)^n = \left(\frac{a}{b} \right)^{m-n}$, where a, b, m, n are non-zero integers.

CASE STUDY BASED QUESTIONS

1. On the occasion of 'Van Mahotsava', students of two sections of Class VIII planted some saplings. There are 32 students in Section A and 40 students in Section B. Each student of section A plants 8 saplings and each student of section B plants 10 saplings.



Based on the given information, answer the following questions :

- (i) The exponential form of total number of saplings planted by Section A with base 2 is :
(a) 2^6 (b) 2^7 (c) 2^8 (d) 2^9
- (ii) The exponential form of total number of saplings planted by Section B is:
(a) 20^{20} (b) 20^2 (c) 2^{20} (d) 4^{10}
- (iii) The expression for product of total number of saplings planted by students of Section A and those of Section B can be written as:
(a) $(16 \times 20)^2$ (b) $(16 \times 20)^4$ (c) $(16 + 20)^2$ (d) $(16 - 20)^2$
- (iv) The expression for quotient of total number of saplings planted by students of Section A to that of Section B can be written as:
(a) $\frac{16^2}{20}$ (b) $\frac{16^2}{-20}$ (c) $16^2 \times 20^2$ (d) $16^2 \times 20^{-2}$

CHAPTER 4 DIRECT AND INVERSE VARIATION

ASSERTION - REASON BASED QUESTIONS

The following questions consist of two statements – Assertion (A) and Reason (R). Answer these questions selecting the appropriate option given below :

- (a) Both A and R are true and R is the correct explanation for A.
(b) Both A and R are true but R is not the correct explanation for A.
(c) A is true but R is false.
(d) A is false but R is true.
1. **Assertion :** If a student can solve 25 questions in 1 hour, then the number of questions he will solve in 12 minutes is 5.
Reason : Two quantities x and y are in direct proportion if $\frac{x}{y} = k$, where k is a constant.
2. **Assertion :** If 18 women can reap a field in 7 days, then 6 women can reap the same field in 21 days.
Reason : It is a case of direct variation.

3. **Assertion :** If 9 taps can empty a tank in 36 minutes, then 4 taps can empty the same tank in 1 hour.

Reason : Two quantities x and y vary inversely if the product xy remains constant i.e., $xy = k$, where k is a constant.

4. **Assertion :** The speed of a moving object varies inversely to the time taken to cover a certain distance.

Reason : More speed less time taken and less speed more time taken to cover the same distance.

CASE STUDY BASED QUESTIONS

1. Salt, also referred to as table salt or by its chemical formula NaCl , is an ionic compound made of sodium and chloride ions.

Sodium chloride crystals are cubic in form. Table salt, which we use everyday, consists of tiny cubes tightly bound together through ionic bonding of the sodium and chloride ions. The salt crystal is often used as an example of crystalline structure. The size and shape of salt crystals can be modified by temperature. Sodium chloride is available in several different particle sizes (gradation) and forms, depending on what the intended end use is.



A housewife buys 6 kg of salt containing 6×10^7 crystals.

Based on the given information, answer the following questions :

- Weight of salt and crystals in it vary directly or inversely ?
- How many crystals are there in 7.5 kg of salt ?
- What is the weight of salt if there are 3.5×10^6 of crystals in the salt ?

Sub science

*Revise all the work done in class.

*Prepare activity file

I) Conservation of plants and animals

Sheets:

1.Prepare a list of all biosphere reserves in India and locate on map

2.Prepare & present, a photo essay on either of topic

a, Medicinal plants;preserving traditional Indian Wisdom

b. Living in harmony;reducing carbon footprints

3.Collect information on project tiger.

II) Stars and solar system

1.Select any one planet from the 8 list planets. collect as much information about this planet as you can. prepare a report that would give details about the following in your report

a) discovery of this planet

b) its special features

c) survival of human beings

2.diagrams of two constellation

3.Phases of moon

III) Prepare mobile lab kit

Friction

Combustion

Refraction & Dispersion of light

Solve the following assignments

(to be done in separate register)

Chapter 1

The cell–It's structure and function

1.Nucleus is separated from the cytoplasm by the membrane

a.Nuclear membrane

b. Cell wall c. Cell membrane d. None

2. Cells in a living organism

a. differs in shape b. size

c.number d. all of these

3. Describe the structure of nucleus

4. The cytoplasm of the cells of a plant contain organelle P which is of several types. Type Q is present in leaves ,type R gives colour to the fruits where as type S is colourless .

a)Identify and name P, Q, R & S.

b) What is the function of Q?

5.When do chromosome appear in the cell ?what role do they play in it ?

6.Name the organelle that

i. help in the locomotion and collection of food in euglena and perission

ii. provides structural framework to cell

iii. the protein factory of cell

iv. suicidal bags of cell

v. the storehouse of cell

7. Make a sketch of human nerve cell .What function do nerve cell perform ?

8. Draw a labelled diagram of animal cell and label the organelles which are common to plant cell and animal cell.

9. Assertion : Ribosomes are responsible for generating energy in the cell

Reason: Ribosomes are known as protein factory of cell

10. Assertion: Eukaryotic cells have membrane bound organelles.

Reason: Prokaryotic cells lack membrane bound organelles.

Chapter 2

Microorganisms: Friends and foes

1. Which type of microorganism is commonly used in the production of bread?

- a) Bacteria
- b) Yeast
- c) Viruses
- d) Protozoa

2. What is the term used for microorganisms that cause diseases?

- a) Probiotics
- b) Pathogens
- c) Symbionts
- d) Decomposers

3. When microbes enter the human body, antibodies are produced to fight them. When these microbes attack again then:

- a) the human body becomes weak and is unable to form antibodies against the microbes
- b) the human body produces antibodies but takes longer to overcome the infection

- c) the human body eliminates microbes without even producing antibodies against them
- d) the human body remembers the microbes and quickly forms antibodies against them.

4. Name a bacteria and a fungus that cause food poisoning

5. Define rancidity

6. Define preservation of food items how can you preserve the following food material fruits and vegetables milk

7. After eating snacks from a road side vendor Tinku complained of nausea, abdominal pain and diarrhoea. What could be the possible reason for his condition? Also name the bacterium responsible for it.

8. How does sugar help to preserve jams and jelly

9. What are antibodies? Who discovered the first vaccine? Insects can spread diseases.

Give two examples to explain this statement

10. Draw a neat diagram of amoeba and label the organelle useful for motion & that controls all the activities of the cell

Chapter 4

Force & Pressure

1. Complete the following with suitable terms

An archer stretches his bow while taking aim at the target. He then releases the arrow, which begins to move towards the target. To stretch the bow, the archer applies a force that causes the change in its _____. The force applied by the archer to stretch the bow is an example of _____ while the arrow moves towards its target the forces acting on it are due to _____ of Air which acts in a direction _____ to the direction of motion

2. Identify the effects of force on the following activities

- a. A lump of dough pressed down by your hand
- b. Trisha smashed the shuttlecock in the opposite court
- c. A batsman hits a ball

- d. Blacksmith hitting iron ore with hammer
3. High rise buildings have a wide base. why?
4. Describe the role of atmospheric pressure while drinking any liquid with the help of a straw
5. Why does a mattress sink more when a person is standing on it compared to when the person is lying on it ?
6. Where is the water pressure greater at a depth of 1 m in a large lake or at a depth of 2 m in a small pond? Explain.
7. How would trust on the bottom of a liquid level change if pressure doubled keeping the pressure same
8. A can filled with water is heated so that water boils. Now seal the mouth with an airtight cap. Let the can cool. Its sides get deformed. Explain why?
9. Assertion: As we move to higher altitudes, breathing can become difficult.
Reason: At higher altitude there is decrease in the atmospheric pressure
10. Assertion: Falling of rain drops is a contact force.
Reason: Gravitational force is an example of contact force.

Chapter 6

Sources of energy

1. Assertion : a good fuel should have high calorific value
Reason : coal has greater efficiency than LPG
2. Assertion: most combustible substances release carbon dioxide in the environment
Reason: Increased concentration of carbon dioxide in the air is believed to cause global warming.
3. Classify the sources of energy on the basis of the occurrence and availability
4. Gaseous fuels are considered the best. Elucidate
5. Name any two varieties of coal. How do various varieties of coal differ from each other?
6. What are the problems caused by using conventional energy sources.
7. Why is petroleum called black gold?
8. What is petroleum refining? Why is it done? Which property of petroleum is used to separate its components?

Chapter 7

Combustion

1. Out of the following different types of fuels the one which is excellent is :
A) the solid fuel
B) the liquid fuel
C) the gaseous fuel
D) none of these
2. The harmful gases produced during combustion of coal and petroleum products are –
A) SO_2
B) NO_2
C) CO
D) All of these
3. A family consumes 14.5 kg of LPG in 28 days. Calculate the average energy consumed per day, if the calorific value of L.P.G. is 55 KJ/g.
4. What is a flame? List the difference between luminous and non-luminous flames
5. Give reason for the following
A) The crackers on ignition produce sound.
B) A good fuel should have high calorific value.
C) A piece of pine wood with sulphur catches fire easily when rubbed with each other.

C)When we boil water in a paper cup on a spirit lamp the paper cup does not catch fire

6.How can the fire caused be extinguished in the case given below

A)Clothes of person catches fire

B)Fire produced by kerosene

7Why do goldsmiths while making ornaments direct the non-luminous part of the flame on gold with help of metallic blow pipe?

8 you given three gaseous fuels A,B & C. 50 gram of each of these fuels is completely burnt .The amount of energy released is found to be 100 kilo Jules, 750 kilo Jule and 675 kilo Jules for the fuels A, B and C respectively.

Arrange fuels in decreasing order of their efficiency and give reason for your answer.

9.Take two paper cups one of the cup is half filled with water fixed to burning candles and heat the two cups above candle flames which Cup starts burning

Which cup does not burn and why?

Is it possible to boil water in the paper cup without burning it?

10.Madhav fixed a lighted candle on the table. Then he held a plane glass slide with a pair of tongs and introduce it into the Luminous part of the flame. He observed a circular greyish black ring on the glass slide.Why ?

He also found that there is no deposition in the middle of the Ring ,Why ?What is the black deposit on the slide called?

Class VIII
Subject Social Science
Holiday homework

Project Work -

On the base of information prepare any one working model-

- Rainwater harvesting
- Natural disaster
- Method of irrigation
- Global warming
- Dams
- Solar energy & use of solar panels

General Work:

1 Prepare a timeline of various Anglo Indian wars and bio-sketches of any two anglo -Indian war(Chapter -9)

2 Explore any five items in your home and surroundings

i Find the minerals and and alloys with which they are made up.

ii Domestic purpose

iii Click the photograph

Collect specimens of various minerals and display them.(Chapter 4 (Mineral and Energy Resources)

2.Prepare following chapters for PT-1

Chapter 1 Resource Utilisation and Development

Chapter 2 Natural resources , soil and water

Chapter 16 Our Constitution

3 Revise all the syllabus done till now.

4 Take the print out of following worksheets, solve them and paste in your S.Sci notebook

Chapter 2

A. Tick the correct option.

1. The most appropriate method to check soil erosion on steep slopes is

- (a) afforestation
- (b) shelter belts
- (c) terrace farming
- (d) None of these

2. Land covers about of the total surface area of the earth.

- (a) 70%
- (b) 50%
- (c) 40%
- (d) 30%

3. The area under forest is highest in

- (a) India
- (b) Japan
- (c) France
- (d) America

4. The percentage of cultivated land in India is

- (a) 57%
- (b) 41%
- (c) 33%
- (d) 28%

5. Soil erosion is caused by mankind's unwise actions which includes

- (a) deforestation
- (b) overgrazing
- (c) deforestation and mining
- (d) deforestation, overgrazing and mining

6. The most appropriate method to check soil erosion in desert regions is

- (a) afforestation
- (b) shelter belts
- (c) terrace farming
- (d) contour ploughing

7. Hirakud Dam built over the river

- (a) Mahanadi
- (b) Narmada
- (c) Damodar
- (d) Son

8. Hoover Valley Project is located in

- (a) Egypt
- (b) USA
- (c) Russia
- (d) Japan

9. The colour, texture etc. of soil is determined by

- (a) time
- (b) climate
- (c) parent rock
- (d) relief

10. The percentage of fresh water on the earth is

- 2.0%
- (b) 2.50%
- (c) 3%
- (d) 3.1%

11. Why are trees planted in rows in a desert region?

- (a) To prevent flood
- (b) To prevent soil erosion
- (c) To prevent wind erosion
- (d) To prevent water erosion

12. Where are thin and infertile soil found?

13. What method is used to save surface run off?

Chapter 8 The Modern Period

Tick the correct option

1. If a historian wants to study the administration during the British rule in India. Which of the following sources would be most relevant?

- (A) Ancient religious texts and commentaries.
- (B) Official British government documents.
- (C) Ancient Indian inscriptions and coins.
- (D) Novels written in the 18th century.

2. Match the column 1 and 2 correctly and choose the correct option:

Column 1	Column 2
1. Anandmath	a. Bal Gangadhar Tilak
2. My Experiments with Truth	b. Lala Lajpat Rai
3. Kesari Newspaper	c. Mahatma Gandhi
4. Unhappy Indians	d. Bankim Chandra Chattopadhyay

Options:

- (A) 1-c, 2-b, 3-a, 4-d
- (B) 1-b, 2-d, 3-a, 4-c
- (C) 1-d, 2-c, 3-a, 4-b
- (D) 1-a, 2-d, 3-c, 4-b

3. What type of 'Source of information' does the Digital South Asia library provide?

- A. Administrative reports
- B. Letters
- C. Internet/database
- D. Newspaper

4. In which one of the following cities is the Gateway of India situated?

- (A) Chennai
- (C) Kolkata
- (B) Mumbai
- (D) Delhi

5. Which of the following facts are Correct about the biggest museum related to Gandhiji?

- (I) It has a very good collection of Gandhi's writings.
- (II) Its library has around 60,000 books.
- (III) It is looked after by Gandhi Smriti.
- (IV) The museum is located at Sabarmati Ashram.
- (A) II & III
- (B) I, II & III
- (C) Only II
- (D) Only III

6. In which language was the newspaper "Amrita Bazar Patrika" published?

- (A) Marathi
- (B) Urdu
- (C) Gujarati
- (D) Bengali

7. In which language was the newspaper "Amrita Bazar Patrika" published?

- (A) Marathi
- (B) Urdu
- (C) Gujarati
- (D) Bengali

8. Arrange the following events in chronological order and choose the correct answer from the given options:

- (A) Establishment of the Indian National congress
- (B) Morley Minto Reforms
- (C) Transfer of power into the hands of the British crown
- (D) Beginning of the Modern period

Options:

- (a) A-B-C-D
- (c) D-C-A-B
- (b) D-A-B-C
- (d) B-C-A-D

9. Which one of the following was NOT established by Britishers to preserve official records?

- (a) Archives
- (b) Museums
- (c) Old buildings
- (d) Digital library

9. Name the author of AnandMath

10. Where are the following situated: President House and Victoria Memoria

Our Constitution

1. Identify one pair from the following which is incorrectly matched:

- A. Sovereign: No country can interfere in our country's internal affairs.
- B. Socialist: India is against exploitation in all forms.
- C. Secular: There is no discrimination on the basis of religion.
- D. Republic: Head of the Government is elected by the people

2. Which of the following statements are correct regarding the Preamble of India? Choose the correct options:

- 1. It is an introduction to the constitution
- 2 It is non-justiciable.
- 3. It is cherished by the national leaders.
- 4. It contains political philosophy.

Options:

- (A) 1,2 and 3
- (B) 1,2 and 4
- (C) only 1 and 4
- (D) only 1 and 2

3. Identify the meaning of 'Secular'.

- (A) Country is free from all external controls.
- (B) Head of the state is an elected person.
- (C) People should live like brothers and sisters.
- (D) No discrimination is made on the ground of religion.

4. The Constituent Assembly opted for a flexible constitution because

- (a) it provides stability to the Parliament
- (b) it is considered progressive in nature and helpful in development of the nation
- (c) it is considered progressive as it gives more power to the elected representatives
- (d) it is a step towards making the central government more powerful

5. Which of the following is a provision that a democratic Constitution does not contain?

- (a) The rights of the people
- (b) The ideals of the people
- (c) Powers and functions of the Legislature, Judiciary and Executive
- (d) The name of the President of a country.

6. Which of the following is not mentioned in the Preamble of India?

- (a) The Federal System
- (b) Justice
- (c) Liberty
- (d) Equality

7. Which of the following personalities was not a member of the Constituent Assembly?

- (a) Dr. S. Radhakrishnan
- (b) Dr. Rajendra Prasad
- (c) Mahatma Gandhi

(d) J.B. Kriplani

8. Who is regarded as the father of the Indian Constitution?

- (a) Jawaharlal Nehru
- (b) Dr. B.R. Ambedkar
- (c) Vallabhbhai Patel
- (d) C. Rajagopalachari

9. Universal Adult Franchise, i.e., the Right to Vote was granted in

- a.1947
- b.1949
- c.1950
- d.1941

10. Correct the following statement and rewrite it:

The Constitution of India was passed on November 26, 1949 and implemented on August 15, 1950.

11. What is meant by Rule of Law?

12. Explain the role of the Constitution in a democratic country.

13. Why is the preamble so important to constitution.?

कक्षा-आठवीं(संस्कृत)
ग्रीष्मावकाश गृहकार्य
याद करने के लिए
पाठ -1,2 अभ्यास कार्य व व्याकरण कार्य
संस्कृत में गिनती (1-50) पेज नं -184
संधि -पेज नं -74,75
पत्राणि- पेज नं -143-150
चित्रवर्णनम् -पेज नं -151-153

नीचे दिया गया कार्य संस्कृत की नोटबुक में लिखें-

गद्यांश पठित्वा प्रश्नानाम् उत्तराणि लिखन्तु -

काकः अभिमानी आसीत्। सः अकथयत्-गच्छ, गच्छ। अत्र स्थानं न अस्ति। कुत्रचित् अन्यत्र गच्छ। तव गृहं नष्टम्। अहं किं करवाणि। तत् श्रुत्वा खिन्ना चटका गच्छति। गच्छति काले ग्रीष्मकालः समाप्तः। वर्षा ऋतुः च आगच्छत्। सर्वत्र हरीतिमा आसीत्। चटका नवीनं गृहम् अरचयत्। तदैव सहसा अतिवृष्टिः अभवत्। काकस्य गृहं नष्टं अभवत्। खिन्नः काकः शरणार्थं चटकायाः समीपं अगच्छत्। चटका तस्य सहर्षं स्वागतं करोति। सर्वं च अवगम्य कथयति-"भ्रातः। चिन्तां मा कुरु। अहं सर्वम् अवगच्छामि। अहं तव प्रतीक्षायाम् आसम्। अन्तः आगच्छतु।" काकः लज्जितः भवति। चटका पुनः कथयति - "भ्रातः ! चिन्तां त्यजतु। आनन्देन भोजनं करोतु। वर्षापर्यन्तम् आवां मिलित्वा अत्र स्थास्यावः। स्वागतं तव। भोजनं करोतु।"

प्रश्न 1. एकपदेन उत्तरत-

- (1) काकः कीदृशः आसीत्?
(11) चटका कीदृशं गृहम् अरचयत्?

प्रश्न 2. पूर्णवाक्येन उत्तरत-

- (1) खिन्नः काकः किम् अकरोत्?
(ii) अभिमानी काकः चटका किम् अकथयत्?

प्रश्न 3. भाषिक कार्यम्-

- (i) अनुच्छेदे 'अनावृष्टिः' इति पदस्य कः विपर्ययः प्रयुक्तः?
(ii) 'खिन्ना चटका' अत्र कः विशेष्यः प्रयुक्तः?

(iii) 'खिन्ना चटका' इति कर्तृपदस्य क्रियापदं किम्?

(iv) 'दुःखी' इत्यस्य पदस्य कः पर्यायः अनुच्छेदे आगतः?

प्रश्नाः 4. एकपदेन उत्तरत-

- (i) चटका केन पदेन काकं सम्बोधयति ?

(ii) चटका काकस्य किं करोति ?

प्रश्न 5. पूर्णवाक्येन उत्तरत-

(i) चटका पुनः किं कथयति ?

(ii) चटका सर्वम् अवगम्य काकं किं कथयति ?

प्रश्न 6. भाषिक कार्यम्-

(i) 'बहिः' इति पदस्य कः विपर्ययः अनुच्छेदे लिखितः?

(ii) अनुच्छेदे 'स्थास्यावः' इति क्रियापदस्य कर्तृपदं किम्?

(iii) 'अहं सर्वम् अवगच्छामि' इदं वाक्यं कः कथयति ?

(iv) 'काकः लज्जितः' अत्र विशेषणपदं किम्?

Class 8
Punjabi holiday homework

Project Work:

1 Punjabi Culture Scrapbook

Collect pictures and write short notes in Punjabi on festivals, folk dances (bhangra, giddha), traditional food, and attire.

Or

. DIY Phulkari Craft

Make a simple paper version of Phulkari embroidery with colored paper or sketch pens. Write a few lines about its importance in Punjabi weddings

Or

3 Mini Puppet Show

Make 2-3 stick puppets.

Create a short script (2–3 Punjabi lines) and record a mini puppet show.

General HW

1 Revise all the syllabus done in class till now.

2 Prepare following Punjabi syllabus for PT-1

ਮੁਹਾਵਰੇ (1-20)

ਬਹੁਤੇ ਸ਼ਬਦਾਂ ਦੀ ਥਾਂ ਇੱਕ ਸ਼ਬਦ(1-20)

ਵਿਰੋਧੀ ਸ਼ਬਦ(1-30)

ਪਾਠ 1,2,3

3.ਆਪਣੀ ਪੰਜਾਬੀ ਪਾਠ ਪੁਸਤਕ ਦਾ ਪਾਠ 17 (ਇੱਕੋ ਅੱਖ ਸੁਲੱਖਣੀ ਨੂੰ ਪੜ੍ਹੋ ਅਤੇ ਹੇਠ ਲਿਖੇ ਪ੍ਰਸ਼ਨਾਂ ਵਿੱਚੋਂ ਕਿਸੇ ਇੱਕ ਪ੍ਰਸ਼ਨ ਦਾ ਉੱਤਰ 150 ਸ਼ਬਦਾਂ ਵਿੱਚ(on single lined sheet) ਲਿਖੋ

ਇਸ ਪਾਠ ਦਾ ਸਾਰ 150 ਸ਼ਬਦਾਂ ਵਿੱਚ ਲਿਖੋ ।


ਜਾਂ

ਇਸ ਨਾਟਕ ਵਿੱਚ ਮਹਾਰਾਜਾ ਰਣਜੀਤ ਸਿੰਘ ਦੇ ਇਨਸਾਫ ਤੇ ਉਸ ਦੀ ਉਦਾਰਤਾ ਤੋਂ ਜਾਣੂ ਕਰਵਾਇਆ ਹੈ। ਉਹਨਾਂ ਦੀ ਉਦਾਰਤਾ ਨਾਲ ਸੰਬੰਧਿਤ ਕਹਾਣੀ ਕੋਈ ਹੋਰ ਕਹਾਣੀ 150 ਸ਼ਬਦਾਂ ਵਿੱਚ ਲਿਖੋ।

3 Take the print out of following worksheets, solve them and paste in your Punjabi notebook-

WORKSHEET 1

ਹੇਠ ਦਿੱਤੇ ਚਿੱਤਰ ਨੂੰ ਵੇਖ ਕੇ ਪਛਾਣੋ ਕੀ ਇਹ ਕਿਸ ਧਾਰਮਿਕ ਸਥਾਨ ਦਾ ਹੈ? ਇਸ ਦਾ ਵਰਨਨ 50 ਕੁ ਸ਼ਬਦਾਂ (ਪੈਰ੍ਹੇ) ਵਿੱਚ ਕਰੋ।



WORKSHEET 2

ਹੇਠ ਲਿਖੀ ਕਾਵਿ ਟੁੱਕੜੀ ਪੜ੍ਹ ਕੇ ਪ੍ਰਸ਼ਨਾਂ ਦੇ ਉੱਤਰ ਦਿਓ-

ਵਿਦਿਆ ਤਾਂ ਪਰਉਪਕਾਰੀ ਏ,
ਹਮੇਸ਼ਾ ਭਲਾ ਕਮਾਉਂਦੀ ਹੈ।
ਬੰਦਾ ਜੋ ਪਸੂ ਬਰਾਬਰ ਹੈ,
ਉਸ ਨੂੰ ਇਨਸਾਨ ਬਣਾਉਂਦੀ ਹੈ।
ਵਿਦਿਆ ਇੱਕ ਐਸਾ ਚਾਨਣ ਹੈ,
ਜੋ ਮਨ ਦੇ ਅੰਦਰ ਜਗਦਾ ਹ,
ਇਸ ਬਿਨ ਚੁਫੇਰੇ ਦੁਨੀਆ ਵਿੱਚ
ਬਸ ਨਿਰਾ ਹਨੇਰਾ ਲੱਗਦਾ ਏ

ਪ੍ਰਸ਼ਨ 1 ਵਿਦਿਆ ਕੀ ਹੈ?

ਪ੍ਰਸ਼ਨ 2 ਵਿਦਿਆ ਤੋਂ ਬਿਨਾਂ ਮਨੁੱਖ ਕੀ ਹੈ?

ਪ੍ਰਸ਼ਨ 3 ਇਸ ਬਿਨਾ ਦੁਨੀਆ ਵਿੱਚ ਹਨੇਰਾ ਹੈ?

WORKSHEET 3

ਹੇਠ ਦਿੱਤੇ ਅਣਡਿੱਠੇ ਨੂੰ ਪੜ੍ਹ ਕੇ ਪ੍ਰਸ਼ਨਾਂ ਦੇ ਉੱਤਰ ਲਿਖੋ

ਅੰਮ੍ਰਿਤਾ ਪ੍ਰੀਤਮ ਪੰਜਾਬ ਦੇ ਕੁਝ ਸ਼੍ਰੋਮਣੀ ਕਵੀਆਂ ਵਿੱਚੋਂ ਹੈ ਜਿਨ੍ਹਾਂ ਦੀ ਰਚਨਾ ਨੂੰ ਪੰਜਾਬੀ ਸਾਹਿਤ ਦੇ ਗੋਰਵ ਵਿੱਚ ਵਾਧਾ ਕੀਤਾ ਹੈ।
ਅੰਮ੍ਰਿਤਾ ਪ੍ਰੀਤਮ ਨੂੰ ਪੰਜਾਬ ਦੀ ਆਵਾਜ਼ ਕਿਹਾ ਜਾਂਦਾ ਹੈ। ਸਚਮੁੱਚ ਉਸ ਦੀ ਰਚਨਾ ਜਗਤ ਦੇ ਜਜ਼ਬਿਆਂ ਉਹਨਾਂ ਦੀਆਂ ਪੀੜਾਂ

ਅਤੇ ਉਹਨਾਂ ਦੇ ਕਸ਼ਟਾਂ ਦੀ ਤਰਜਮਾਨੀ ਹੈ। ਅੰਮ੍ਰਿਤਾ ਪ੍ਰੀਤਮ ਨੇ ਸਾਹਿਤ ਦੇ ਬਹੁਤੇ ਸਾਰੇ ਰੂਪਾਂ ਤੇ ਕਲਮ ਅਜਮਾਈ ਕੀਤੀ ਹੈ। ਪਰੰਤੂ ਉਸ ਨੂੰ ਵਧੇਰੇ ਮਾਨਤਾ ਕਵਿਤਰੀ ਦੇ ਰੂਪ ਵਿੱਚ ਹੀ ਮਿਲੀ ਹੈ।

1. ਅੰਮ੍ਰਿਤਾ ਪ੍ਰੀਤਮ ਪੰਜਾਬ ਦੇ ਕਿਹੜੇ ਕਵੀਆਂ ਵਿੱਚੋਂ ਸ਼ਾਮਿਲ ਹੈ?
2. ਅੰਮ੍ਰਿਤਾ ਪ੍ਰੀਤਮ ਨੂੰ ਕੀ ਕਿਹਾ ਜਾਂਦਾ ਹੈ?
3. ਅੰਮ੍ਰਿਤਾ ਪ੍ਰੀਤਮ ਦੀ ਰਚਨਾ ਦੇ ਵਿਸ਼ੇ ਕਿਹੜੇ ਹਨ?
4. ਅੰਮ੍ਰਿਤਾ ਪ੍ਰੀਤਮ ਨੂੰ ਵਧੇਰੇ ਮਾਨਤਾ ਕਿਸ ਵਿੱਚ ਮਿਲੀ ਹੈ?
5. ਇਸ ਪੈਰੇ ਦਾ ਢੁਕਵਾਂ ਸਿਰਲੇਖ ਦਿਉ।

WORKSHEET 4

ਵਾਕਾਂ ਨੂੰ ਸੁੱਧ ਕਰੋ-

ਸ਼ੇਨੇ ਦੇ ਗੈਰਵੇ ਬੋਹਤ ਮੈਂਹਗੇਂ ਹਨ।

ਉਸ ਨੂੰ ਮਲਮ ਪਟੀ ਕਰੋ।

ਤੇਰਾ ਚੇਹਰਾ ਕਯੋਂ ਉਤਰਿਆ ਹੈ?

ਐਥੇ ਰੈਹਣਾ ਠੀਕ ਨਹੀਂ।

ਔਰੰਗਜ਼ੇਬ ਜ਼ਾਲਿਮ ਰਾਜਾ ਸੀ

ਮੁੰਢਿਆਂ ਨੇ ਭੰਗੜਾ ਪਾਯਾ

WORKSHEET 5

ਹੇਠ ਲਿਖੇ ਅਰਥਾਂ ਨਾਲ ਸੰਬੰਧਿਤ ਮੁਹਾਵਰਾ ਲਿਖ ਕੇ ਵਾਕਾਂ ਵਿੱਚ ਵਰਤੋ-

1 ਆਦਰ ਮਾਣ ਕਰਨਾ _____

2 ਸਾਥ ਦੇਣਾ _____

3 ਭੈੜੀ ਮੱਤ ਦੇਣੀ

4 ਫਾਲਤੂ ਬੋਲਣਾ

5 ਬਰਾਬਰ ਟੱਕਰ ਲੈਣੀ



**DAV
PUBLIC
SCHOOL**

Yamunanagar, Haryana



Homework



Class-8th ICT



Topic:



Prepared by:







Chapter 1:

A. Multiple Choice Questions (MCQs):

(Tick the correct answer)

1. The full form of LAN is:

- a) Local Area Network
- b) Long Area Network
- c) Large Area Network
- d) Local Access Network

2. A modem is used to:

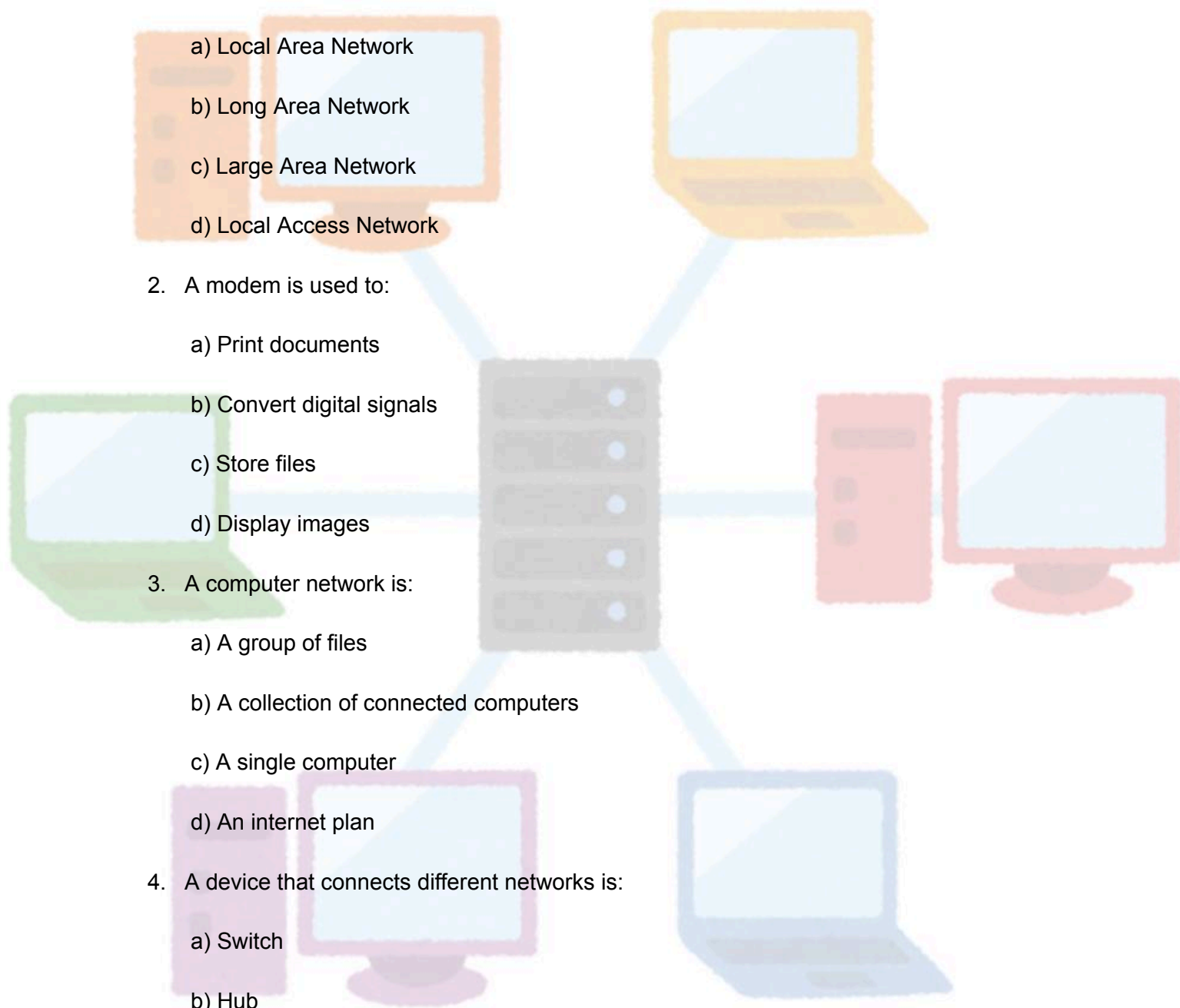
- a) Print documents
- b) Convert digital signals
- c) Store files
- d) Display images

3. A computer network is:

- a) A group of files
- b) A collection of connected computers
- c) A single computer
- d) An internet plan

4. A device that connects different networks is:

- a) Switch
- b) Hub
- c) Router





d) Printer

5. The network used within a city is called:

a) LAN

b) WAN

c) MAN

d) CAN

6. Which of the following is a wired communication medium?

a) Bluetooth

b) Wi-Fi

c) Optical Fiber

d) Infrared

7. What does PAN stand for?

a) Personal Access Network

b) Public Area Network

c) Personal Area Network

d) Private Area Node

8. Which device is also known as a multi-port repeater?

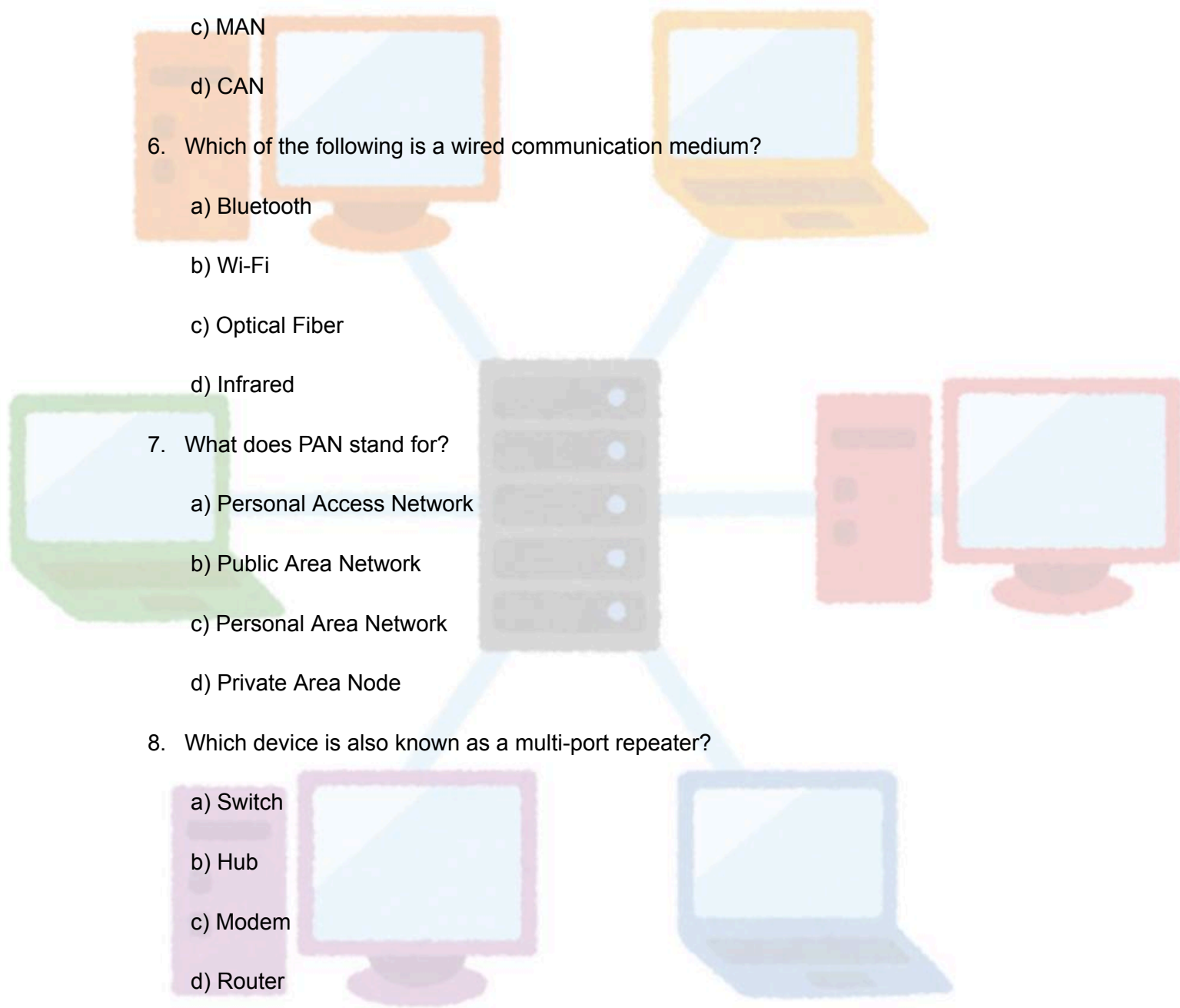
a) Switch

b) Hub

c) Modem

d) Router

9. Which topology connects each computer to a single backbone?





- a) Star
- b) Ring
- c) Mesh
- d) Bus

10. Bluetooth works in:

- a) LAN
- b) WAN
- c) PAN
- d) MAN

. Short Answer Questions:

14. What is the role of a modem in networking?

15. Define the term 'topology'.

16. Write the full forms of LAN, WAN, MAN

17. Explain the function of a router.





18. What is meant by network security?

B. Art Integrated Activity:

Draw and colour any two network topologies (Star, Ring, Bus, Mesh) on an A4 sheet with proper labels.

Write 1–2 lines describing each.

C. Project Work:

Topic: How Internet is Used in Our Daily Life

Create a small presentation (3–5 slides) or a poster showing:

- Devices that use the Internet
- Apps used by students
- Benefits of Internet in education

Chapter 2: HTML – 1

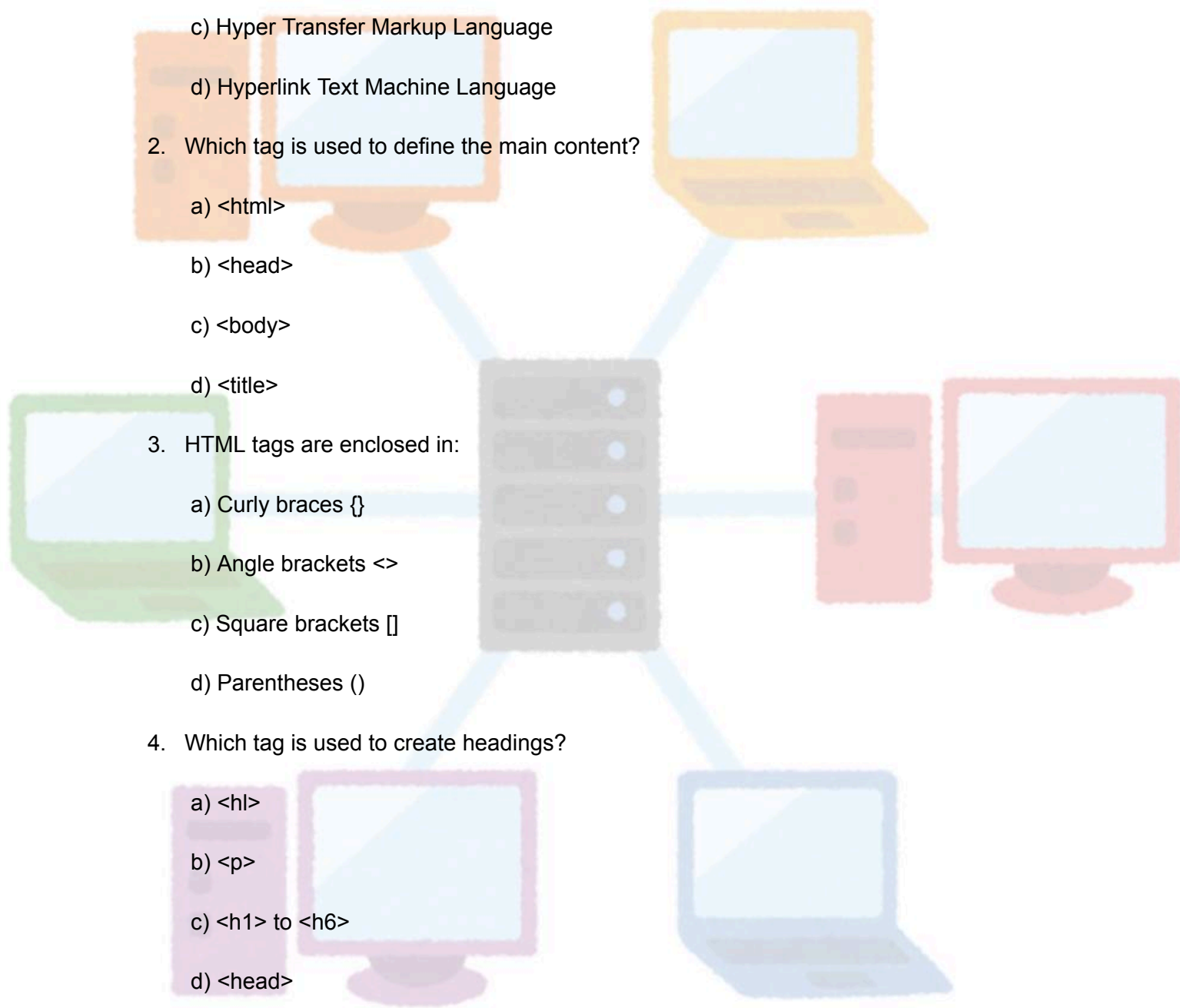
A. Multiple Choice Questions (MCQs):





(Tick the correct answer)

1. HTML stands for:
 - a) High Text Markup Language
 - b) Hyper Text Markup Language
 - c) Hyper Transfer Markup Language
 - d) Hyperlink Text Machine Language
2. Which tag is used to define the main content?
 - a) <html>
 - b) <head>
 - c) <body>
 - d) <title>
3. HTML tags are enclosed in:
 - a) Curly braces {}
 - b) Angle brackets <>
 - c) Square brackets []
 - d) Parentheses ()
4. Which tag is used to create headings?
 - a) <hl>
 - b) <p>
 - c) <h1> to <h6>
 - d) <head>
5. The tag used for paragraph is:





a) <para>

b) <p>

c) <text>

d) <paragraph>

6. What is the use of
 tag?

a) New paragraph

b) New line

c) Page break

d) None

7. The <title> tag is placed inside:

a) <head>

b) <body>

c) <html>

d) <h1>

8. The basic structure of an HTML document starts with:

a) <title>

b) <html>

c) <body>

d) <h1>

9. Which tag is used to draw a horizontal line?

a) <line>

b) <hr>





c) `
`

d) `<hl>`

10. An HTML document is saved with which extension?

a) .doc

b) .html

c) .exe

d) .txt

Short Answer & Practical Questions:

11. What is the difference between `
` and `<p>` tags

12. List any four HTML tags and their functions.

13. How many heading levels are there in HTML? Name them.

14. Write HTML code to display your name as a heading.





15. Write HTML code to display two paragraphs and a line break in between.

16. What is the output of following program

```
<html>
  <body>
    <h1>My First Page</h1>
    <p>Hello World!</p>
    <br>
    <p>Welcome to HTML</p>
  </body>
</html>
```


B. Art Integrated Activity:

Topic: Design a colourful HTML Web Page layout on paper

Task: Draw how your first web page might look. Include:

- A title
- A heading
- A paragraph
- A line break

Decorate and label each section with HTML tag names.



Class VIII

Subject - GK

Q.1 Learn page no 1 to 20 .

Q 2 Read newspaper daily and paste any five National and international news on a colourful sheet with newspaper cutting.

Q 3 Make an activity showing emotions and expressions on A4 sheet (reference pg no -9)

Q.4 make a project on traffic signals.

Q.5 Learn and write the following questions.

1.Who is the current Prime Minister of India? (Answer: Narendra Modi)

2.What is the capital of France? (Answer: Paris)

3.Which planet is known as the "Red Planet"? (Answer: Mars)

4.What is the largest mammal in the world? (Answer: Blue Whale)

5.Which is the longest river in the world? (Answer: Nile River)

6.Who is known as the "Father of the Nation" in India? (Answer: Mahatma Gandhi)

7.What is the name of the largest ocean in the world? (Answer: Pacific Ocean)

8.Which mountain range is located in the northern part of India? (Answer: Himalayas)

9.What is the smallest continent in the world? (Answer: Australia)

10.Which is the largest planet in our solar system? (Answer: Jupiter)

Drawing holiday homework

Do book work 5 to 20 pages and make five paintings on A3 sheets.

Mandala art ,abstract painting, pencil sketch painting ,landscape, composition.

MINDFULNESS ACTIVITY

The Purpose of **LIFE SKILLS**

Remove Stage Fear



Develop Positive
Social Skills and
Etiquettes



Develop Work Ethics




Learn Job
Interview Skills



Listen, Speak, and
Understand Language



Become Self-Confident



WHAT I LIKE ABOUT ME

NAME :

Things I am good at:

--	--

--	--

--	--

--	--

--	--

--	--

--	--

--	--

--	--



WHO AM I...

My name is :

This is me

I live at

I am years old

My hair is

What is special about me

I like to

WHAT DO I LOOK LIKE?...

My hair is

My height is

My build is

Do I wear glasses?

The clothes I like are

This is me

I go to

My pets are

My best friend is

What is important to me

THINGS ABOUT ME!

My favourite music

My favourite place

My favourite T.V. Programme

My favourite food

I get angry when

I worry about

I look forward to

I want to be

This makes me happy

This is my favourite animal



WHAT I LIKE AND DO NOT LIKE ABOUT MYSELF...

Name :

What I like about myself

What I do not like about myself

Would I change anything about myself?

I AM / I AM NOT...

I am

I would like to be

I am not

Because...